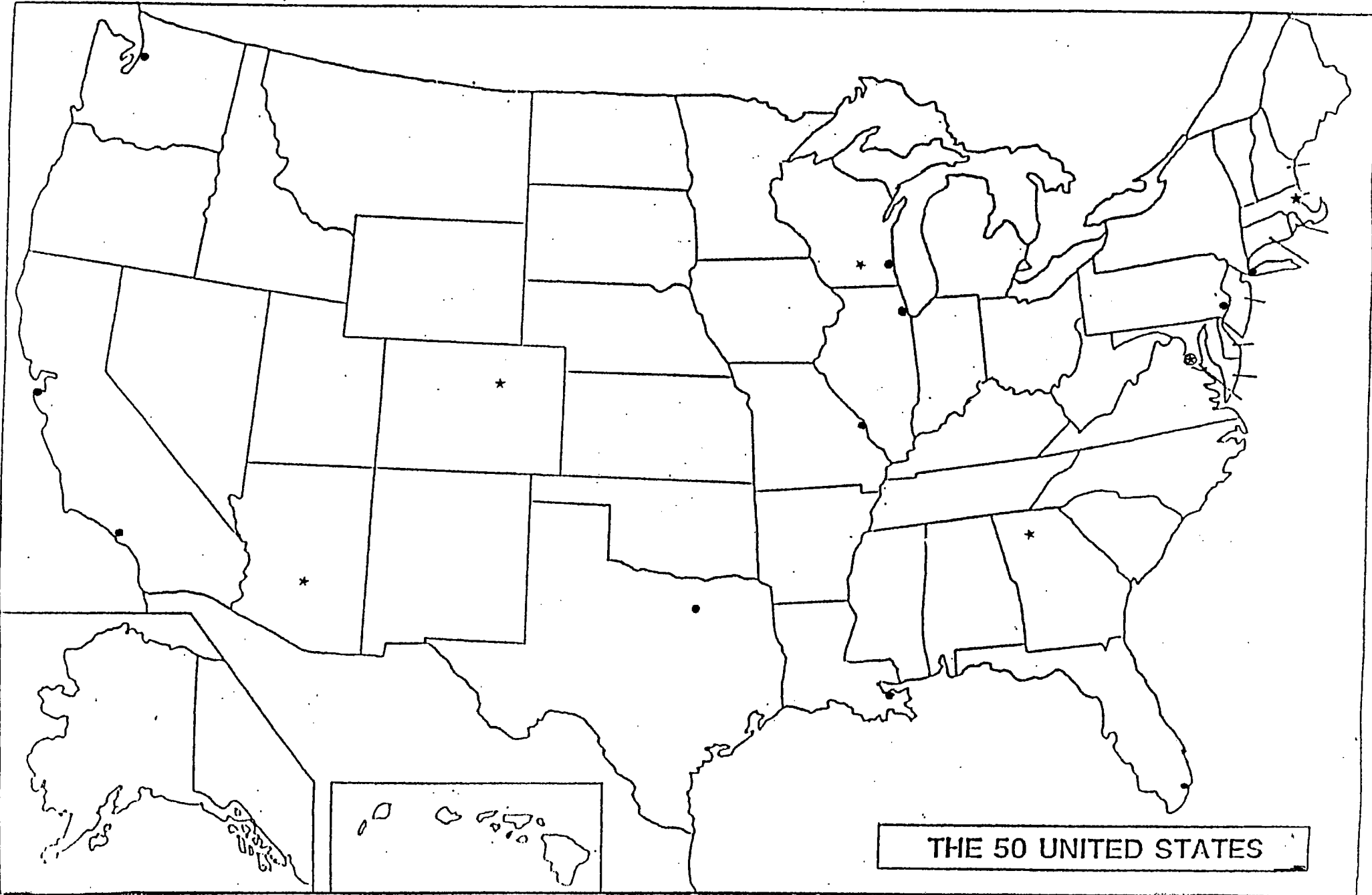




United States



THE 50 UNITED STATES

Name _____

Date _____

United States Map
States and Cities
Second Grade-Form 1

Put the number or letter on the map that tells where each place is located.

States

Cities

1. Wisconsin

a. Washington D.C.

2. Illinois

b. Madison

3. Minnesota

4. Iowa

5. California

6. Florida

7. Texas

8. Maine

SCHOOL DISTRICT OF FORT ATKINSON



GEOGRAPHY PROFICIENCY TEST

Name _____

Date _____

United States Map
States and Cities
Second Grade-Form 2

Put the number or letter on the map that tells where each place is located.

States

1. California

2. Maine

3. Iowa

4. Florida

5. Wisconsin

6. Illinois

7. Minnesota

8. Texas

Cities

a. Madison

b. Washington D.C.

SCHOOL DISTRICT OF FORT ATKINSON



GEOGRAPHY PROFICIENCY TEST

Name _____

Date _____

United States Map
States and Cities
Second Grade-Form 3

Put the number or letter on the map that tells where each place is located.


States

1. Iowa
2. Illinois
3. California
4. Texas
5. Maine
6. Florida
7. Wisconsin
8. Minnesota

Cities

- a. Washington D.C.
- b. Madison

SCHOOL DISTRICT OF FORT ATKINSON



GEOGRAPHY PROFICIENCY TEST

Name _____ Date _____

United States Map
States and Cities
Third Grade-Form 1

Put the number or letter on the map that tells where each place is located.

States


1. Washington
2. Idaho
3. Ohio
4. Montana
5. Indiana
6. Michigan
7. Wisconsin
8. Minnesota
9. South Dakota
10. Wyoming
11. Illinois
12. Maine

13. Florida
14. California
15. Texas
16. Colorado
17. North Dakota
18. New York
19. Louisiana
20. Pennsylvania
21. Georgia
22. Alabama
23. Mississippi
24. Iowa

Cities

- a. Miami
- b. Madison
- c. Los Angeles
- d. Chicago
- e. Washington D. C.
- f. New York

SCHOOL DISTRICT OF FORT ATKINSON



GEOGRAPHY PROFICIENCY TEST

Name _____ Date _____

United States Map
States and Cities
Third Grade-Form 2

Put the number or letter on the map that tells where each place is located.

States


1. Maine
2. Texas
3. Michigan
4. Colorado
5. Wisconsin
6. New York
7. Georgia
8. Mississippi
9. South Dakota
10. California
11. Illinois
12. Florida

13. Washington
14. Idaho
15. Ohio
16. Montana
17. North Dakota
18. Iowa
19. Louisiana
20. Indiana
21. Pennsylvania
22. Alabama
23. Minnesota
24. Wyoming

Cities

- a. Madison
- b. New York
- c. Washington D. C.
- d. Miami
- e. Los Angeles
- f. Chicago

SCHOOL DISTRICT OF FORT ATKINSON



GEOGRAPHY PROFICIENCY TEST

Name _____ Date _____

United States Map
States and Cities
Third Grade-Form 3

Put the number or letter on the map that tells where each place is located.

States

1. Maine
2. Texas
3. Michigan
4. Alabama
5. Iowa
6. New York
7. Georgia
8. Pennsylvania
9. South Dakota
10. Florida
11. Illinois
12. California

13. North Dakota
14. Idaho
15. Ohio
16. Montana
17. Washington
18. Wisconsin
19. Louisiana
20. Indiana
21. Mississippi
22. Colorado
23. Minnesota
24. Wyoming

Cities

- a. Chicago
- b. New York
- c. Madison
- d. Miami
- e. Los Angeles
- f. Washington D. C.

SCHOOL DISTRICT OF FORT ATKINSON



GEOGRAPHY PROFICIENCY TEST

Name _____

Date _____

United States Map
State and Cities
Fourth Grade

Put the number or letter on the map that tells where each place is located.

States

Cities

- | | | |
|--------------------|--------------------|------------------|
| 1. Wisconsin | 25. North Carolina | a. Madison, WI |
| 2. Florida | 26. Oklahoma | b. Washington DC |
| 3. California | 27. New Mexico | c. New York |
| 4. Texas | 28. Arizona | d. Chicago |
| 5. Maine | 29. Utah | e. Los Angeles |
| 6. Illinois | 30. Nevada | f. Miami |
| 7. Iowa | 31. Oregon | g. Dallas |
| 8. Minnesota | 32. Tennessee | h. Denver |
| 9. Washington | 33. Hawaii | i. Seattle |
| 10. Idaho | 34. Alaska | j. Atlanta |
| 11. Montana | 35. Pennsylvania | k. Philadelphia |
| 12. Wyoming | 36. New York | l. Milwaukee |
| 13. Colorado | 37. Georgia | |
| 14. North Dakota | 38. Mississippi | |
| 15. South Dakota | 39. Louisiana | |
| 16. Michigan | 40. Alabama | |
| 17. Indiana | | |
| 18. Ohio | | |
| 19. Arkansas | | |
| 20. Missouri | | |
| 21. Kentucky | | |
| 22. Nebraska | | |
| 23. Kansas | | |
| 24. South Carolina | | |

SCHOOL DISTRICT OF FORT ATKINSON



GEOGRAPHY PROFICIENCY TEST

Name _____ Date _____

United States Map
State and Cities
Fifth Grade

Put the number or letter on the map that tells where each place is located.

States

Cities

- | | | |
|--------------------|--------------------|------------------|
| 1. Wisconsin | 25. North Carolina | a. Madison, WI |
| 2. Florida | 26. Oklahoma | b. Washington DC |
| 3. California | 27. New Mexico | c. New York |
| 4. Texas | 28. Arizona | d. Chicago |
| 5. Maine | 29. Utah | e. Los Angeles |
| 6. Illinois | 30. Nevada | f. Miami |
| 7. Iowa | 31. Oregon | g. Dallas |
| 8. Minnesota | 32. Tennessee | h. Denver |
| 9. Washington | 33. Hawaii | i. Seattle |
| 10. Idaho | 34. Alaska | j. Atlanta |
| 11. Montana | 35. Pennsylvania | k. St. Louis |
| 12. Wyoming | 36. New York | l. San Francisco |
| 13. Colorado | 37. Georgia | m. Phoenix |
| 14. North Dakota | 38. Mississippi | n. New Orleans |
| 15. South Dakota | 39. Louisiana | o. Philadelphia |
| 16. Michigan | 40. Alabama | p. Milwaukee |
| 17. Indiana | 41. Massachusetts | q. Boston |
| 18. Ohio | 42. Vermont | |
| 19. Arkansas | 43. New Hampshire | |
| 20. Missouri | 44. Connecticut | |
| 21. Kentucky | 45. Rhode Island | |
| 22. Nebraska | 46. New Jersey | |
| 23. Kansas | 47. Maryland | |
| 24. South Carolina | 48. Delaware | |
| | 49. Virginia | |
| | 50. West Virginia | |

SCHOOL DISTRICT OF FORT ATKINSON

