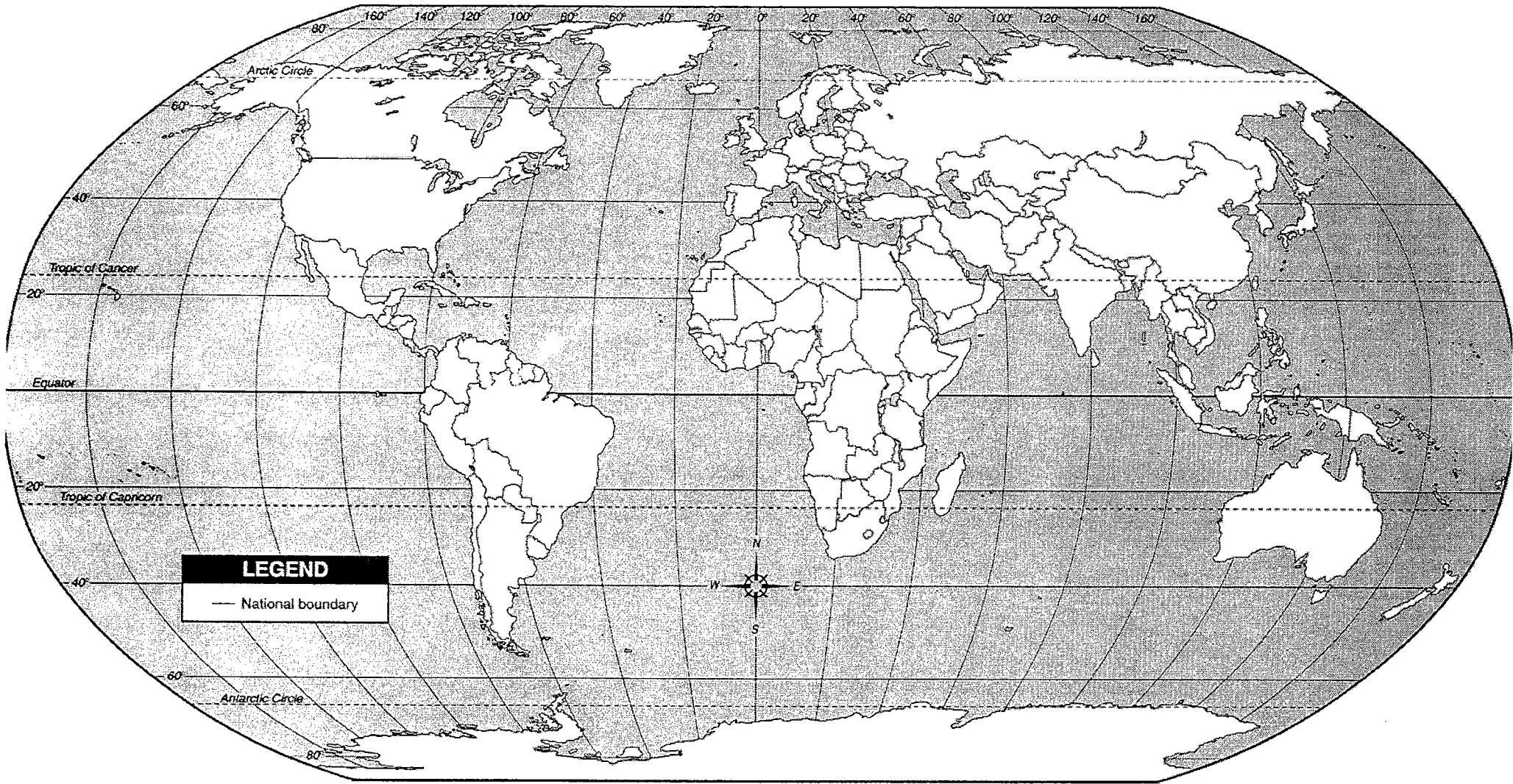


World: Political



Name _____


Date _____

World: Political Map
Third Grade-Form 1

Put the numbers on the map to show where each place is located.

1. China
2. India
3. Brazil
4. Russia
5. United States
6. Mexico
7. Canada
8. Japan

SCHOOL DISTRICT OF FORT ATKINSON



GEOGRAPHY PROFICIENCY TEST

Name _____

Date _____

World: Political Map
Third Grade-Form 2

Put the numbers on the map to show where each place is located.

1. Russia
2. Canada
3. Japan
4. China
5. United States
6. Mexico
7. India
8. Brazil

SCHOOL DISTRICT OF FORT ATKINSON



GEOGRAPHY PROFICIENCY TEST

Name _____


Date _____

World: Political Map
Third Grade-Form 3

Put the numbers on the map to show where each place is located.

1. India
2. China
3. Japan
4. Brazil
5. Mexico
6. United States
7. Russia
8. Canada

SCHOOL DISTRICT OF FORT ATKINSON



GEOGRAPHY PROFICIENCY TEST


Name _____ Date _____

World Political Map
Fourth Grade-Form 1

Put the numbers on the map to show where each place is located.

1. China
2. India
3. Brazil
4. Russia
5. United States
6. Mexico
7. Canada
8. Japan
9. France
10. Egypt
11. United Kingdom
12. Germany
13. Panama
14. Saudi Arabia

SCHOOL DISTRICT OF FORT ATKINSON



GEOGRAPHY PROFICIENCY TEST

Name _____ Date _____

World Political Map
Fourth Grade-Form 2

Put the numbers on the map to show where each place is located.

1. Panama
2. Japan
3. Brazil
4. Egypt
5. Saudi Arabia
6. Mexico
7. Canada
8. India
9. France
10. Russia
11. United Kingdom
12. Germany
13. China
14. United States

SCHOOL DISTRICT OF FORT ATKINSON



GEOGRAPHY PROFICIENCY TEST

Name _____ Date _____

World Political Map
Fourth Grade-Form 3

Put the numbers on the map to show where each place is located.

1. Panama
2. Japan
3. France
4. Egypt
5. Saudi Arabia
6. Germany
7. United Kingdom
8. India
9. Brazil
10. Russia
11. Canada
12. Mexico
13. China
14. United States

SCHOOL DISTRICT OF FORT ATKINSON



GEOGRAPHY PROFICIENCY TEST


Name _____ Date _____

World Political Map
Fifth Grade-Form 1

Put the numbers on the map to show where each place is located.

- | | |
|--------------------|------------------|
| 1. China | 15. Israel |
| 2. India | 16. South Africa |
| 3. Brazil | 17. Indonesia |
| 4. Russia | 18. Iraq |
| 5. United States | 19. Argentina |
| 6. Mexico | 20. Nigeria |
| 7. Canada | |
| 8. Japan | |
| 9. France | |
| 10. Egypt | |
| 11. United Kingdom | |
| 12. Germany | |
| 13. Panama | |
| 14. Saudi Arabia | |

SCHOOL DISTRICT OF FORT ATKINSON



GEOGRAPHY PROFICIENCY TEST

Name _____ Date _____

World Political Map
Fifth Grade-Form 2

Put the numbers on the map to show where each place is located.

- | | |
|--------------------|------------------|
| 1. Japan | 15. Israel |
| 2. Argentina | 16. South Africa |
| 3. Iraq | 17. Indonesia |
| 4. Russia | 18. Brazil |
| 5. Panama | 19. India |
| 6. Mexico | 20. Nigeria |
| 7. Canada | |
| 8. Japan | |
| 9. France | |
| 10. Egypt | |
| 11. United Kingdom | |
| 12. Germany | |
| 13. Panama | |
| 14. Saudi Arabia | |

SCHOOL DISTRICT OF FORT ATKINSON



GEOGRAPHY PROFICIENCY TEST


Name _____ Date _____

World Political Map
Fifth Grade-Form 3

Put the numbers on the map to show where each place is located.

- | | |
|--------------------|------------------|
| 1. Saudi Arabia | 15. Canada |
| 2. Argentina | 16. South Africa |
| 3. Iraq | 17. Indonesia |
| 4. Russia | 18. Brazil |
| 5. Panama | 19. India |
| 6. Mexico | 20. Nigeria |
| 7. Israel | |
| 8. Japan | |
| 9. France | |
| 10. Germany | |
| 11. United Kingdom | |
| 12. Egypt | |
| 13. Panama | |
| 14. China | |

SCHOOL DISTRICT OF FORT ATKINSON



GEOGRAPHY PROFICIENCY TEST